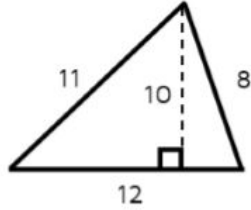


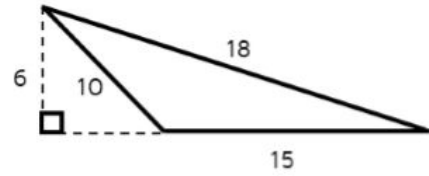
Examples

Find the area of each triangle.

1.

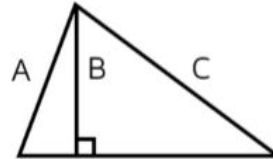


2.

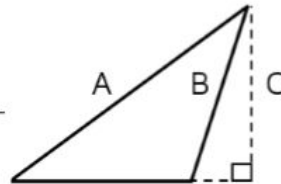


Practice

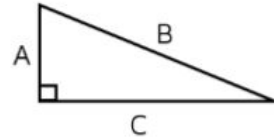
1. Which segment represents the height of the triangle? _____



2. Which segment represents the height of the triangle? _____

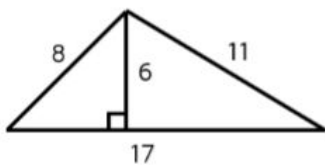


3. If C is used for the base of the triangle, which segment should be used as the height? _____

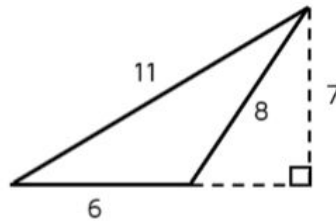


4 – 6: Find the area of each triangle.

4.



5.



6.

